

Aluno \_\_\_\_\_

Turma \_\_\_\_\_

N.P. \_\_\_\_\_

NOTA \_\_\_\_\_

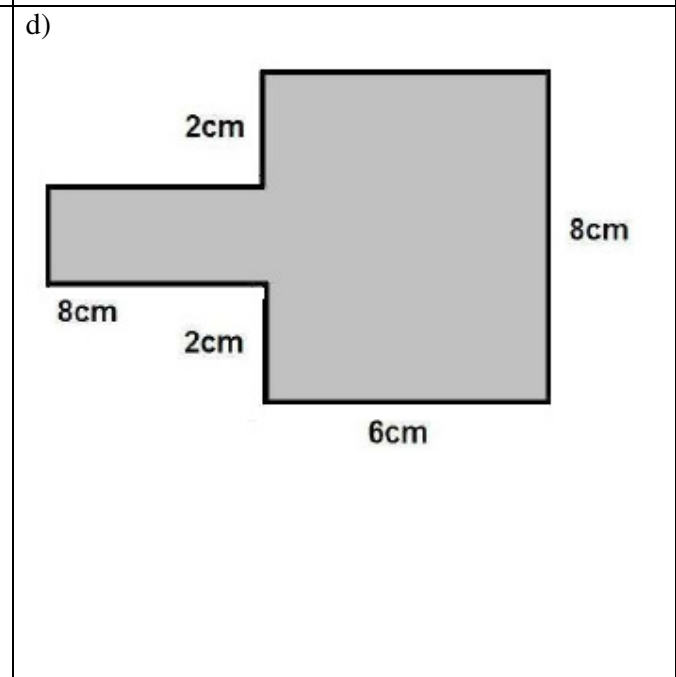
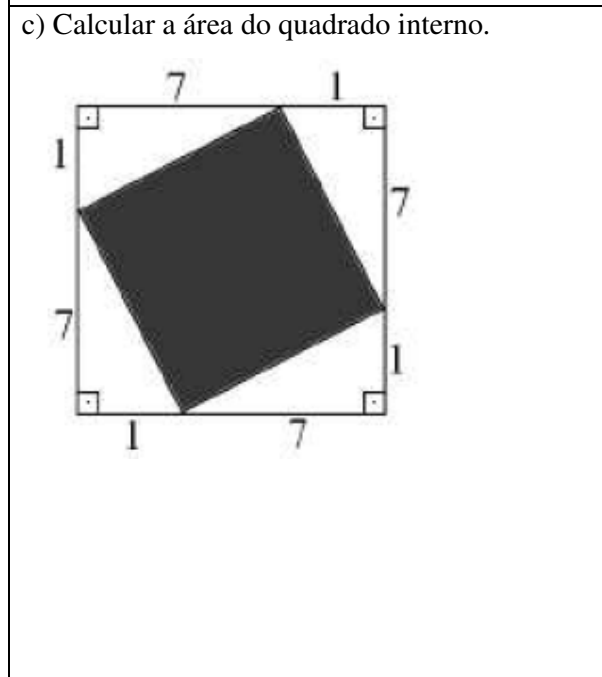
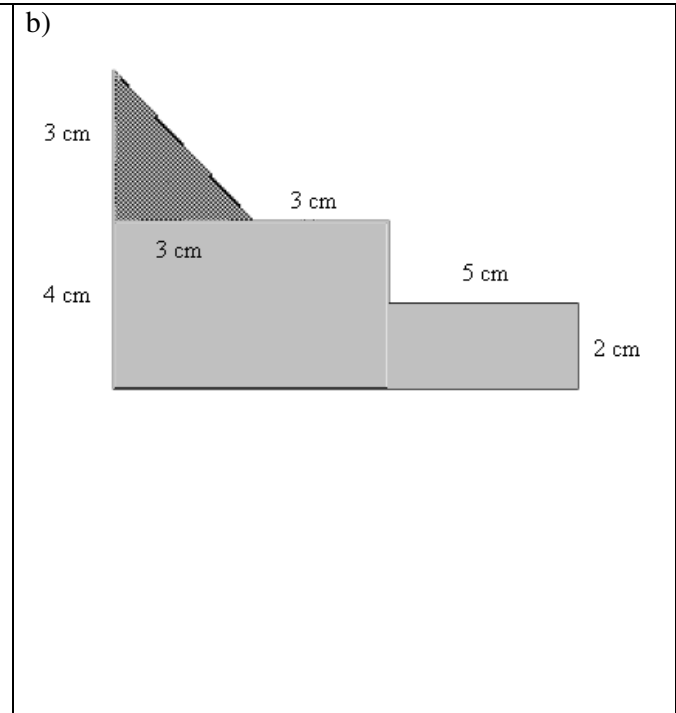
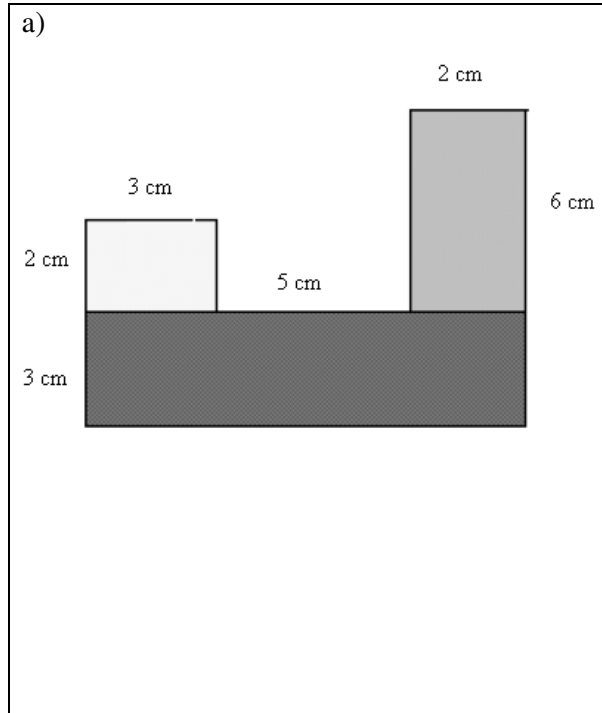
Data \_\_\_\_\_

N.C. \_\_\_\_\_

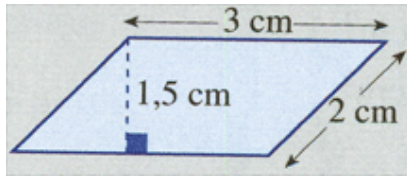


**LISTA DE EXERCÍCIOS 11 - 6ª SÉRIE - MATEMÁTICA**

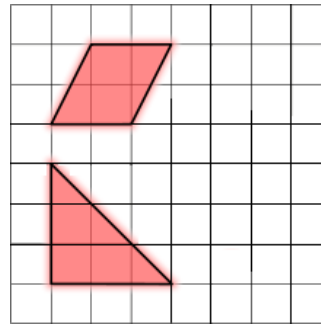
01. Determine a área das figuras planas abaixo.



e)



f) Cada quadradinho abaixo possui 4 mm<sup>2</sup> de área.



02. Agora calcule os perímetros apenas das figuras a), d) e e) do exercício anterior.

a)	d)	e)
----	----	----

**Gabarito:**

1) a) 48 cm<sup>2</sup> b) 38,5 cm<sup>2</sup> c) 50 cm<sup>2</sup> d) 80 cm<sup>2</sup> e) 4,5 cm<sup>2</sup> f) paral. = 16 mm<sup>2</sup> triângulo = 18 mm<sup>2</sup>

2) a) 43 cm d) 44 cm e) 10 cm